


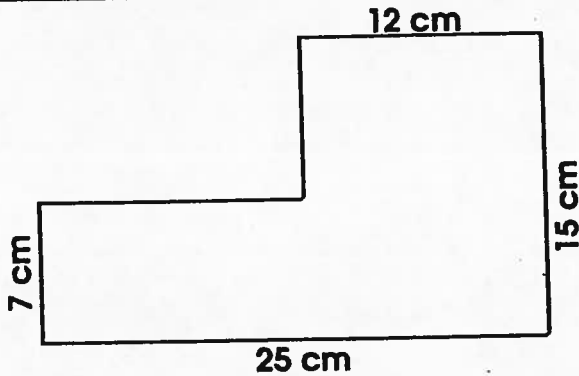
MEASUREMENT



Test

Calculate the perimeter and the area of the following figures.

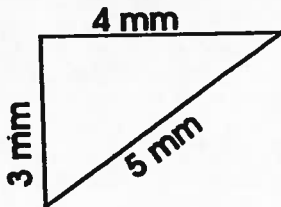
27.



Area = _____

Perimeter = _____

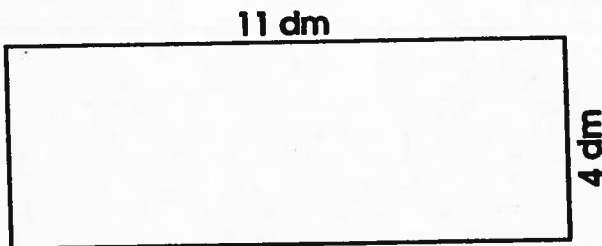
28.



Area = _____

Perimeter = _____

29.



Area = _____

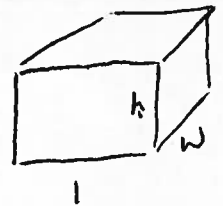
Perimeter = _____

Calculate the volume of each box.

30. $L = 8 \text{ cm}$, $W = 8 \text{ cm}$, $H = 3 \text{ cm}$ Volume = _____

31. $L = 10 \text{ m}$, $W = 10 \text{ m}$, $H = 10 \text{ m}$ Volume = _____

32. $L = 19 \text{ mm}$, $W = 6 \text{ mm}$, $H = 18 \text{ mm}$ Volume = _____



- 1) Make a video on your ipod explaining how you would find the perimeter of one of 27, 28 or 29. Answer the question!
- 2) Make a video on your ipod explaining how you would find the area of one of 27 or 29. Answer the question!
- 3) Make a video on your ipod explaining how you would find the volume of one of 30, 31 or 32. Answer the question!